



INDIAN SCHOOL AL WADI AL KABIR

POST MIDTERM REVISION PAPER 2025 – 2026

NAME:

DATE:

CLASS: SEC: _____ ROLL NO: _____

SUBJECT: EVS

TR'S SIGN:

General Instructions:

- This paper consists of 3 sections and 4 pages.
- All questions are compulsory.

SECTION – A

I. Read the questions carefully and choose the correct answer from the options given.

- Which of the following animals eat plants?
a) lion b) tiger c) horse d) bear
- The home of a dog is called a _____.
a) stable b) den c) kennel d) burrow.
- The _____ helps the bird to change direction while flying.
a) beak b) tail c) toes d) wings
- Which of the following animals have neither legs nor wings?
a) bat b) wasp c) crocodile d) fish
- What process is happening when tiny water droplets in the clouds fall down as rain?
a) precipitation b) condensation c) evaporation d) Collection
- Which of the following animals is a source of honey?
a) ant b) spider c) housefly d) bee
- Which of the following birds can fly over very long distances?
a) hen b) ostrich c) emu d) crane
- After purification, water is collected in big tanks called _____.
a) buckets b) reservoirs c) bottles d) cup

II. Match the following.

COLUMN A	COLUMN B
1. Ahmedabad	a. hind limbs
2. vulture	b. Sabarmati
3. oil glands	c. shallow cup
4. bear	d. waterproof

1. _____ 2. _____ 3. _____ 4. _____

III. State whether the following statements are TRUE or FALSE.

1. Some animals like bats and insects can fly. _____
2. The city of Delhi is developed near the river Hoogly. _____
3. The body of a bird is shaped like a boat. _____
4. Animals move around only in search of shelter. _____
5. Water is made in water treatment plants. _____
6. Down feathers keep a bird warm. _____


IV. Give an example for each of the following.

1. A bird that flies at low heights: _____
2. A hopping animal: _____
3. A cud-chewing animal: _____
4. A bird that builds its nest on high tree tops: _____
5. A disease caused by drinking dirty water: _____

SECTION – B

V. Observe the pictures given below and answer the questions that follow.

1. Zarin went to a farm in Barka. She noticed some tall birds with long necks and strong legs. She wondered if these birds could fly.



a) Name the bird which Zarin saw at the farm. _____

b) The bird has _____ wings and _____ body and hence cannot fly.

c) What are birds that cannot fly called? Give 2 more examples.

2. Dev went to a farm on a weekend. He saw a large, brown animal standing near a tree. He noticed that it looked tired and had a small wound on its leg. He felt sorry for the animal and wanted to do something to help.

a) The animal which Dev saw was a _____.


b) This animal is useful to us.

So, it is a _____ animal.

c) What kind of food does this animal eat?

d) In what ways is this animal useful to us?

e) What suggestion should Dev give to the caretaker.



3. One day, Riya saw dark clouds in the sky. Soon it began to rain. After some time, the sun came out and dried the water. She tried to recall some of the terms she had learned in class about this and wrote it down as follows:

Precipitation, Collection, Evaporation, Condensation

a) Name the process shown in the picture.

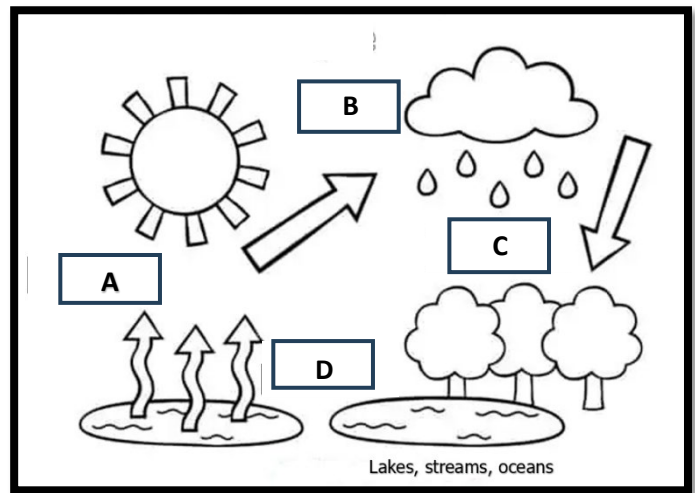
b) Label the stages of the process marked as:

A – _____

B – _____

C – _____

D – _____



c) What helps water to evaporate from the oceans, lakes and rivers?

SECTION – C

1. How do frogs and ducks swim in water?

2. Name the three types of bird feathers and mention the function of each.

3. List any two properties of water.

